



Year 6 SATs 2026 Presentation for Parents, Carers & Guardians

What are the SATs?

- SATs are the Standardised Assessment Tests that are given to children at the end of Key Stage 2.
- The SATs take place over four days, starting on **Monday 11th May** ending on **Thursday 14th May**.
- The SATs papers consist of:
 - Grammar, punctuation and spelling (paper 1: GPS) – Monday 11th May
 - Grammar, punctuation and spelling (paper 2: Spelling) – Monday 11th May
 - Reading – Tuesday 12th May
 - Maths (paper 1: Arithmetic) – Wednesday 13th May
 - Maths (paper 2: Reasoning) – Wednesday 13th May
 - Maths (paper 3: Reasoning) – Thursday 14th May
- Writing is assessed using evidence collected throughout Year 6. There is no Year 6 SATs writing test.



When and how the SATs are completed

- The tests take place during normal school hours, under exam conditions.
- Children are not allowed to talk to each other from the moment the assessments are handed out until they are collected at the end of the test.
- After the tests are completed, the papers are sent away to be marked **externally**.
- The results are then sent to the school in July.
- Each test lasts no longer than 60 minutes:
 - Spelling, punctuation and grammar (paper 1: Grammar/ Punctuation) – 45 minutes
 - Spelling, punctuation and grammar (paper 2: Spelling) – 15 minutes
 - Reading – 60 minutes
 - Maths (paper 1: Arithmetic) – 30 minutes
 - Maths (paper 2: Reasoning) – 40 minutes
 - Maths (paper 3: Reasoning) – 40 minutes



Specific arrangements for SATs

Children with additional needs (who have similar support as part of day-to-day learning in school) may be allotted specific arrangements, including:

- Additional (extra) time;
- Tests being opened early to be modified e.g. copied onto coloured paper;
- An adult to scribe (write) for them;
- An adult to read for them;
- The use of prompts or rest breaks;
- Arrangements for children who are ill or injured at the time of the tests.



The results

Tests are marked externally. Once marked, the tests will be given the following scores:

- A raw score (total number of marks achieved for each paper);
- A scaled score (see below);
- A judgement on if the National Standard has been met.

After marking each test, the external marker will convert the raw score to a scaled score. Even though the tests are made to the same standard each year, the questions must be different. This means the difficulty of the tests may vary. Scaled scores ensures an accurate comparison of performance over time.

Scaled scores range from 80 to 120.

A scaled score of 100 or more shows the pupil is meeting the National Standard.



Grammar, Punctuation and Spelling: Monday 11th May

Grammar, punctuation and spelling consists of two papers.

- Paper 1 focuses on all three elements (grammar, punctuation and spelling or GPS). The paper lasts for **45 minutes**.
- Paper 2 consists of a spelling test only. It should take approximately **15 minutes**, although this is not a set amount of time (pupils should be given as much time as they need to complete the test).

This test focuses on:

- Grammatical terms/ word classes;
- Functions of sentences;
- Combining words, phrases and clauses;
- Verb forms, tenses and consistency;
- Punctuation;
- Vocabulary;
- Standard English and formality.

This test requires a range of answer types but does not require longer formal answers.



Grammar, Punctuation and Spelling: Paper 1 (GPS)

Example questions:

4

Which sentence must end with a **question mark**?

Tick one.

Shall we go round the fitness trail in the park

We could go tomorrow if you like

What I really like is the rope bridge

Let me know what you would like to do

1 mark

37

Complete the sentence below with an appropriate **subordinating conjunction**.

e.g. **Although, While**

_____ it rained all afternoon, the picnic was a success.

1 mark

32

The teacher wants to write a sign to remind children to turn the lights off.

Write the **command** that the teacher might use on the sign.
Remember to punctuate your answer correctly.

e.g. Switch off the lights! Please turn off the lights.

1 mark



Grammar, Punctuation and Spelling: Paper 2 (spelling)

Paper 2 is a shorter paper that focuses solely on spellings.

Example questions:

Spelling

1. The children were _____ the objects from smallest to largest.
2. Do not show _____ to anyone.
3. I was given a _____ award.

2022 Spelling script

Spelling 1: The word is **ordering**.

The children were **ordering** the objects from smallest to largest.

The word is **ordering**.

Spelling 2: The word is **disrespect**.

Do not show **disrespect** to anyone.

The word is **disrespect**.

Spelling 3: The word is **special**.

I was given a **special** award.

The word is **special**.



Reading: Tuesday 12th May

There is one reading test that lasts for **60 minutes**.

The test is designed to measure if the children's comprehension of age-appropriate reading material meets the national standard. There are three different set texts for children to read. These could be any combination of **non-fiction, fiction and/ or poetry**.

The test covers the following areas (known as Content Domains):

- Give/ explain the meaning of words in context;
- Retrieve and record information/ identify key details from fiction and non-fiction;
- Summarise main ideas from more than one paragraph;
- Make inferences from the text/ explain and justify inferences with evidence from the text;
- Predict what might happen from details stated and implied;
- Identify/ explain how information/ narrative content is related and contributes to meaning as a whole;
- Identify/ explain how meaning is enhanced through choice of words and phrases;
- Make comparisons within the text.



Reading

The reading SATs paper requires a range of answer styles.

Example questions:

Questions 1–11 are about *The Parsnips* (pages 4–6)

1 Veronika's football team has two names.

What are the **two** names?

1. _____

2. _____

THE CLUB – THE FACTS

Name: Parrs Under 11s, also known as "The Parsnips"

Capacity: 500

Sponsor: Sweet Peas Garden Centre, Mowborough

Ground: Lornton FC, Low Road, Lornton

Plays in: The Nettie Honeyball Women's League

Coach: Hannah Preston

Assistant coach: Katie Regan

Qu.	Requirement	Mark
1	<p>Veronika's football team has two names.</p> <p>What are the two names?</p> <p>Content domain: 2b – retrieve and record information or identify key details from fiction and non-fiction</p> <p>Award 1 mark for reference to Parrs Under 11s and The Parsnips, e.g.</p> <ul style="list-style-type: none">• <i>The Parsnips</i>• <i>Parsnips</i>• <i>Parrs under 11s</i>• <i>Parrs</i>.	1m

Reading

Example questions:

Based on text 2: My Circus Life

17 Look at page 9.

Vladik is always changing his *Dralion* performance.

Give **two** ways that these changes to his performance happen.

1. _____

2. _____

2 marks

Do those changes happen naturally, or are you looking for ways to change it?

Sometimes those changes happen naturally, yeah. Sometimes I say to myself, "Wait a minute! I'm doing this differently." I don't know how it even happens. Some things, of course, I modify deliberately; I add a trick in or something. It's easy to do it in practice. I have many, many tricks in training. But when you're on stage, it's different because you really have to have it perfect. Especially because you get used to doing the same things for that long. So when you start to put in something new, you automatically feel your body doing something wrong. [Laughs]

Qu.	Requirement	Mark
17	<p>Look at page 9.</p> <p>Vladik is always changing his <i>Dralion</i> performance.</p> <p>Give two ways that these changes to his performance happen.</p> <p>Content domain: 2b – retrieve and record information or identify key details from fiction and non-fiction</p> <p>Award 1 mark for reference to any of the following, up to a maximum of 2 marks:</p> <ol style="list-style-type: none">Vladik's performance changing naturally / without him knowing how it happens, e.g.<ul style="list-style-type: none"><i>changes happen naturally</i><i>he just does the changes and he doesn't even realise.</i>Vladik deliberately making changes to his performance, e.g.<ul style="list-style-type: none"><i>he modifies them on purpose</i><i>they happen deliberately.</i>Vladik adding a trick, e.g.<ul style="list-style-type: none"><i>putting in a new trick.</i>	Up to 2m

Reading

Example questions: Based on the whole text

33 Think about the whole text.

What impressions do you get of Penelope as she describes her unusual experience?

Give **two** impressions, using evidence from the text to support your answer.

1. _____

2. _____

3 marks

Qu.	Requirement	Mark
33	<p>Think about the whole text.</p> <p>What impressions do you get of Penelope as she describes her unusual experience?</p> <p>Give two impressions, using evidence from the text to support your answer.</p> <p>Content domain: 2d – make inferences from the text or explain and justify inferences with evidence from the text</p> <p>Acceptable points:</p> <ol style="list-style-type: none">1. curious2. imaginative3. confused4. unafraid5. solitary / content with her own company6. observant <p>Award 3 marks for two acceptable points, at least one with evidence, e.g.</p> <ul style="list-style-type: none">• 1. <i>She has a big imagination because she thinks that she is in a forest when she is sitting in the stairway.</i> [AP2 + evidence]2. <i>That she is good at noticing things that go on.</i> [AP6]• 1. <i>I think she is just a curious girl who wants to know everything that is going on.</i> [AP1]2. <i>She is very confused. 'I never felt them touch me and this gave me a curious sensation.'</i> [AP3 + evidence] <p>Award 2 marks for either two acceptable points, or one acceptable point with evidence, e.g.</p> <ul style="list-style-type: none">• 1. <i>Brave because she did the right thing in the situation.</i> [AP4]2. <i>She was a person who definitely kept herself to herself.</i> [AP5]• 1. <i>She is not afraid. 'Ran downstairs and pushed open the door... expecting to see her.'</i> [AP4 + evidence] <p>Award 1 mark for one acceptable point, e.g.</p> <ul style="list-style-type: none">• 1. <i>She likes to find out about other people.</i> [AP1]	Up to 3m



Reading

Since the current testing formation for the SATs began in 2016, there has been a tendency for three types of questions to be the most popular.

In the 2023 Reading SATs paper,

- 18% of marks could be gained from answering questions involving giving and explaining the meaning of words in context;
- 32% of marks could be gained from answering questions involving retrieving and recording information or identifying key details from a text;
- 46% of marks could be gained from answering questions involving making inferences from a text and justifying inferences with text evidence.

When reading with your child at home try focusing on these types of questions.



Maths: Wednesday 13th May and Thursday 14th May

The maths assessments consist of three tests.

- Paper 1: Arithmetic (30 minutes) – Wednesday 13th May
- Paper 2: Reasoning (40 minutes) – Wednesday 13th May
- Paper 3: Reasoning (40 minutes) – Thursday 14th May



Maths Paper 1 (Arithmetic)

The maths arithmetic paper has a total of **40 marks** and lasts for **30 minutes**.

The test covers the four operations (addition, subtraction, multiplication, division, including order of operations requiring BIDMAS), percentages of amounts and calculating with decimals and fractions.

Example questions:

32 $2\frac{1}{2} - \frac{2}{3} =$

1 mark

33

$$\begin{array}{r} 4078 \\ \times \quad 67 \\ \hline \end{array}$$

Show your method

2 marks

Qu.	Requirement	Mark	Additional guidance
32	$1\frac{5}{6}$ OR $\frac{11}{6}$	1m	Accept equivalent mixed numbers, fractions or an exact decimal equivalent, e.g. 1.8 $\bar{3}$ (accept any unambiguous indication of the recurring digits). Do not accept rounded or truncated decimals.
33	Award TWO marks for the correct answer of 273,226 If the answer is incorrect, award ONE mark for a formal method of long multiplication with no more than ONE arithmetic error, e.g. • $\begin{array}{r} 4078 \\ \times \quad 67 \\ \hline 28546 \\ 244680 \\ \hline 273126 \text{ (error)} \end{array}$ OR • $\begin{array}{r} 4078 \\ \times \quad 67 \\ \hline 28544 \text{ (error)} \\ 244680 \\ \hline 273224 \end{array}$	Up to 2m	Working must be carried through to reach a final answer for the award of ONE mark. Do not award any marks if the error is in the place value, e.g. the omission of the zero when multiplying by tens: $\begin{array}{r} 4078 \\ \times \quad 67 \\ \hline 28546 \\ 24468 \text{ (place value error)} \\ \hline 53014 \end{array}$



Maths Paper 1 (Arithmetic)

Example 1 mark questions:

6 $6.48 + 8.6 =$

6.48	
+ 8.6	
<hr/>	
15.08	
1	

1 mark

15 = 596×7

596	
x 7	
<hr/>	
4172	
64	

1 mark

27 15% of 3,200 =

10% of 3,200 = 320	
5% of 3,200 = 160	
15% of 3,200 = 480	

1 mark

35 $6 + 4 \div 2 =$

$4 \div 2 = 2$	
$6 + 2 = 8$	

1 mark



Maths Papers 2 and 3 (Reasoning)

Paper 2 will take place on Wednesday 13th May and paper 3 will take place on Thursday 14th May. These tests have a total of 35 marks each and lasts for 40 minutes each.

These papers require children to demonstrate their mathematical knowledge and skills, as well as their ability to solve problems and their mathematical reasoning. They cover a wide range of mathematical topics from key stage 2 including,

- Number and place value (including Roman numerals);
- The four operations;
- Geometry (properties of shape, position and direction);
- Statistics;
- Measurement (length, perimeter, mass, volume, time, money);
- Algebra;
- Ratio and proportion;
- Fractions, decimals and percentages.



Maths Papers 2 (Reasoning)

Example questions:

6

Emma has a 5 litre bag of compost.



She uses 2.75 litres.

How much compost does Emma have left?

2.25 litres

1 mark

7

In a race, Ali completes a swim, a run and a bicycle ride.

The swim is $\frac{1}{10}$ of the total distance.

The run is $\frac{3}{10}$ of the total distance.

What fraction of the total distance is the **bicycle ride**?

$\frac{6}{10}$

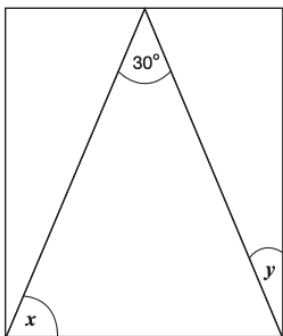
1 mark

Maths Papers 2 (Reasoning)

Example question:

24

Here is an **isosceles** triangle inside a rectangle.



Not to scale

Calculate the sizes of angles x and y .

Show your method

$x =$

°

$y =$

°

2 marks

24

Award **TWO** marks for the correct answer of $x = 75$ **AND** $y = 15$

If the answer is incorrect, award **ONE** mark for evidence of an appropriate method calculating both angles, e.g.

- $180 - 30 = 150$
 $150 \div 2 = 70$ (*error*)
 $90 - 70$

OR

Award **ONE** mark for either correct x **OR** y .

Up to 2m

Answer need not be obtained for the award of **ONE** mark.

If there is no evidence of an appropriate method and the values for x **AND** y are incorrect, accept for **ONE** mark $x + y = 90$, unless x is between 65–69 (inclusive) **AND** y is between 21–25 (inclusive).

Maths Papers 3 (Reasoning)

Example questions:

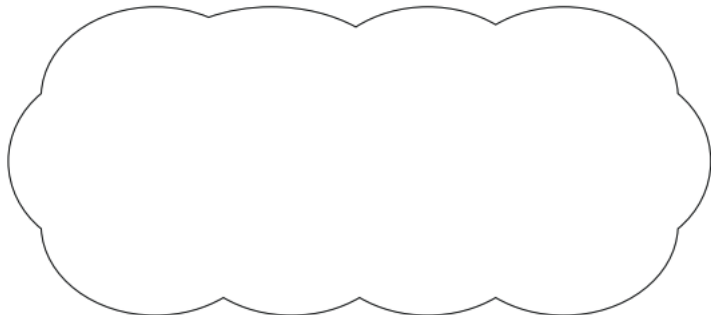
19

Jack says,

When you square a prime number, the answer has only two factors.



Explain why Jack is **not** correct.



1 mark

19

Award **ONE** mark for a correct explanation, e.g.

- It has 3 factors – the prime number, 1 and the square of the prime number.
- The prime number has 2 factors; the squared prime number will be divisible by one, itself and the prime number.
- All prime numbers squared have 3 factors.

OR

A correct explanation that gives a counter example, e.g.

- 5 is prime
 $5^2 = 25$
25 has 3 factors: 1, 5 and 25, not two
- 7^2 has more than 2 factors – 1, 7 and 49
- $121 = 1 \times 121 = 11 \times 11$
- $3^2 = 9$
9 – 1, 9, 3
- $5^2 = 25$
Factors of 25 = 1, 5, 25
All squared primes have 3 factors.

1m

Do not accept vague or incomplete explanations, e.g.

- A square number doesn't have 2 factors (repeat of the question)
- $2^2 = 4$ (incomplete)
- Prime numbers have 2 factors only (incomplete)
- Prime numbers squared have more than 2 factors (vague)

Do not accept explanations which include incorrect mathematics or incorrect information relevant to the explanation, e.g.


- $49 = 1, 7, 49$
- 5 squared is 25
1, 5, 5, 25
25 has four factors
- All prime numbers squared have more than 3 factors

Supporting your child in preparing for the SATs

Firstly, a positive attitude goes a long way. Give them as much encouragement and support as you can (but we don't need to tell you that)!

Tips:

- Please avoid using 2023, 2024 and 2025 test papers as these will be used in school.
- Utilise school-provided CGP books and access [maths.co.uk/spag.com](https://www.maths.co.uk/spag.com) which format work similarly to the papers.
- Talk to your child's class teacher if you have any concerns.
- Encourage your child to talk to their teacher or a trusted adult (including yourself) about their anxieties. Don't forget that a small amount of anxiety is normal and not harmful.
- Give your child a quiet, distraction free space to complete homework or study.
- Encourage children to attend additional sessions, particularly to boost self-esteem and confidence.
- Ensure your child is eating and drinking well and getting a good amount of sleep prior to the assessments.



Things to remember about SATs

SATs focus on what children know about Maths and English.

They will not reflect how talented they are at science, geography, art, PE..., and they certainly won't highlight all of their amazing personal characteristics.

SATs don't tell the whole story.

Their results will say if they did or did not meet a certain standard but not necessarily by what margin. These thresholds change each year according to the overall national performance, so what was classed as 'meeting the expected standard' this year might not be the same as last year. Your school may be able to provide you with more detailed feedback.

SATs are only four days out of a whole Primary School career.

In reality, there's one or two papers each day that last 30 to 60 minutes.

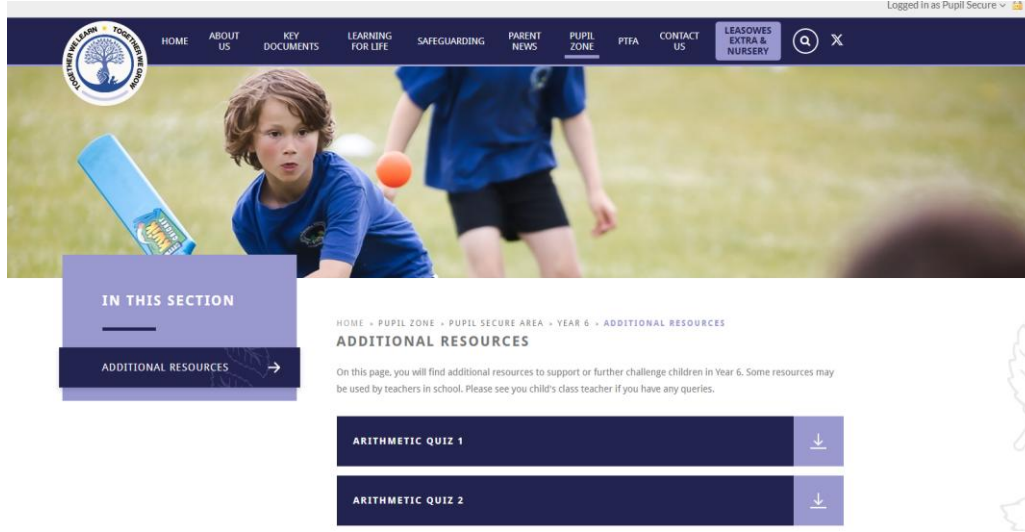


Year 6 Revision Club

- A light-hearted extension to the school day where Y6 staff (plus a few guest stars each week) plan revision activities focused on what the children need/ would like to go over.
- Flexible and fun.
- Runs from the end of school until 4:20pm, starting on **Monday 2nd February.**
- Runs every Monday evening that we are in school until SATs week (every Monday except w/c 4th May when, due to May Day Bank Holiday, revision club will be on **Tuesday 5th May. This will be the final revision club session.**
- Please take a letter tonight.



Resources to support



The screenshot shows the Leasowes website's Pupil Secure Area. The top navigation bar includes links for HOME, ABOUT US, KEY DOCUMENTS, LEARNING FOR LIFE, SAFEGUARDING, PARENT NEWS, PUPIL ZONE (highlighted), PTA, CONTACT US, and LEASOWES EXTRA & NURSERY. A search icon is also present. Below the navigation is a banner image of children playing cricket. A purple sidebar on the left contains the text 'IN THIS SECTION' and 'ADDITIONAL RESOURCES' with a right-pointing arrow. The main content area shows a breadcrumb trail: HOME > PUPIL ZONE > PUPIL SECURE AREA > YEAR 6 > ADDITIONAL RESOURCES. Below this is the heading 'ADDITIONAL RESOURCES' and a paragraph: 'On this page, you will find additional resources to support or further challenge children in Year 6. Some resources may be used by teachers in school. Please see you child's class teacher if you have any queries.' Two resource cards are listed: 'ARITHMETIC QUIZ 1' and 'ARITHMETIC QUIZ 2', each with a download icon.

- Lots of resources are posted within the Pupil Secure Area on the Leasowes website.
Login: pupil@Leasowes.co.uk
Password: TogetherWeLearn
- These include GPS, Reading, Maths (Arithmetic and Reasoning) as well as support with times tables etc.
- CGP books, maths.co.uk, spag.com etc.



Questions?